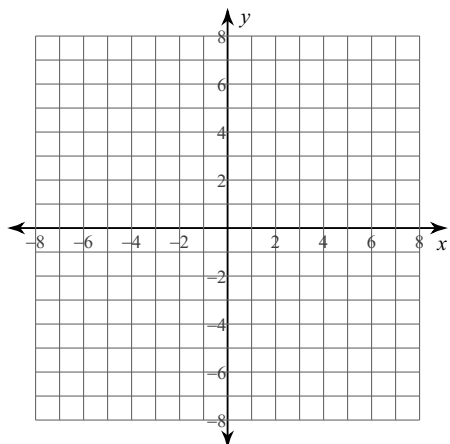


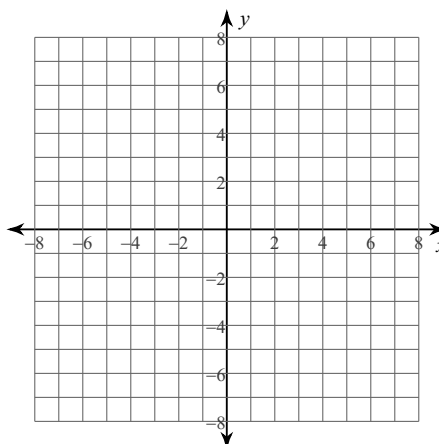
WS 11 - Washer Method

For each problem, find the volume of the solid that results when the region enclosed by the curves is revolved about the the x -axis. You may use the provided graph to sketch the curves and shade the enclosed region.

1) $y = 4, y = \sqrt{x}, x = 1, x = 4$

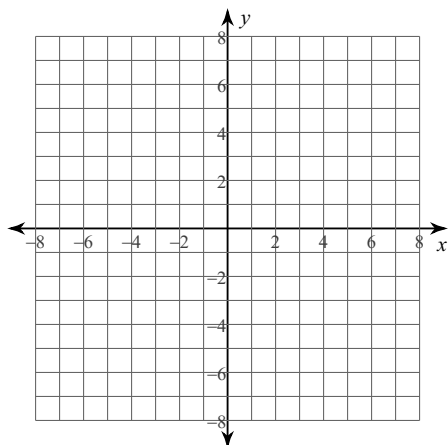


2) $y = x^2 + 2, y = 2, x = 1$

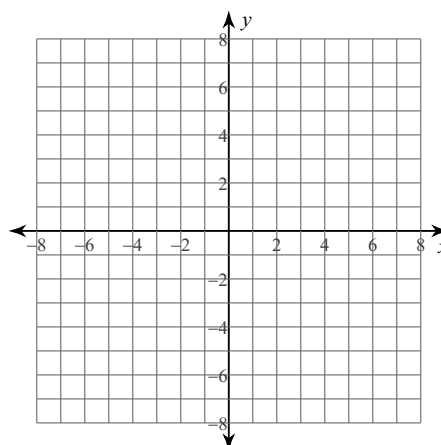


For each problem, find the volume of the solid that results when the region enclosed by the curves is revolved about the the y -axis. You may use the provided graph to sketch the curves and shade the enclosed region.

3) $x = -y^2 + 5, x = y + 3, y = -2, y = -1$

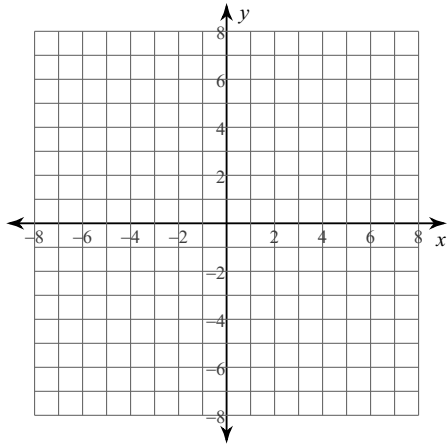


4) $x = \sqrt{y + 1}, x = \frac{y}{2} + 1$

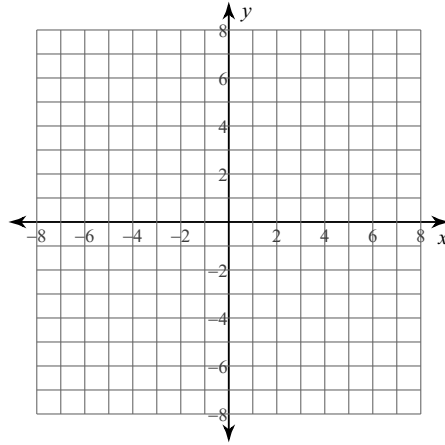


For each problem, find the volume of the solid that results when the region enclosed by the curves is revolved about the the given axis. You may use the provided graph to sketch the curves and shade the enclosed region.

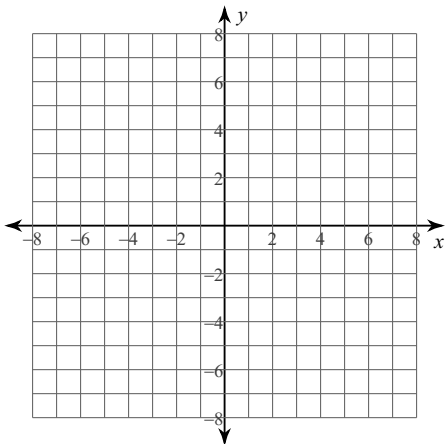
5) $y = 2x + 1$, $y = x^2 + 1$
Axis: $y = 0$



6) $x = 2$, $x = \sqrt{y - 1}$, $y = 1$
Axis: $y = 0$



7) $x = -y^2 + 6$, $x = 2$, $y = -2$, $y = -1$
Axis: $x = 0$



8) $y = 1$, $y = \sqrt{x - 1}$, $x = 1$
Axis: $x = 0$

